



BLS INTERNATIONAL SCHOOL



SESSION 2023-2024

CLASS III

WINTER HOLIDAY

Home

Work



Name: _____

Class: _____

Sec: _____

Roll No. _____

GENERAL INSTRUCTIONS

Dear Parents,

Holidays is the time when you can connect with your child in many ways. As you are your child's first and most important teacher, you can encourage your child's learning. Kindly assist your child with the following homework.

SUBJECT	HOMEWORK
ENGLISH (GRAMMAR BOOK)	<ol style="list-style-type: none">1. Do worksheet no. 4,5,6,7 given on page 46 to 512. Chapter- 11 "The ants" Learn from English literature notebook.
HINDI	<ol style="list-style-type: none">1. पाठ्य पुस्तक - गीतांश<ul style="list-style-type: none">• पाठ 12 जादू का ब्रुश- कॉपी कार्य याद करें।2. व्याकरण संबोध-<ul style="list-style-type: none">• 51 से 100 गिनतियाँ याद कीजिए।• भाग- 3• अभ्यासपत्र - 2, और 3 (पृष्ठ संख्या 116, 117, 120, 122, 123, 124, 125, 126, 129, 130) पुस्तक में करें।
MATHS	<ol style="list-style-type: none">1. Learn and write table from 11 to 20 in homework copy2. Draw clock in your homework copy depicting time -<ol style="list-style-type: none">1. 3:20 (B) 12:15 (C) 8:50 (D) 10:35
EVS	<ol style="list-style-type: none">1. Do page number 52 and 56 in workbook.2. Chapter-15 and Chapter-18 Learn from notebook.
COMPUTER	<ol style="list-style-type: none">1. Do test paper on page 92 in book.2. Learn worksheet on page-91 from your book.

Name: _____

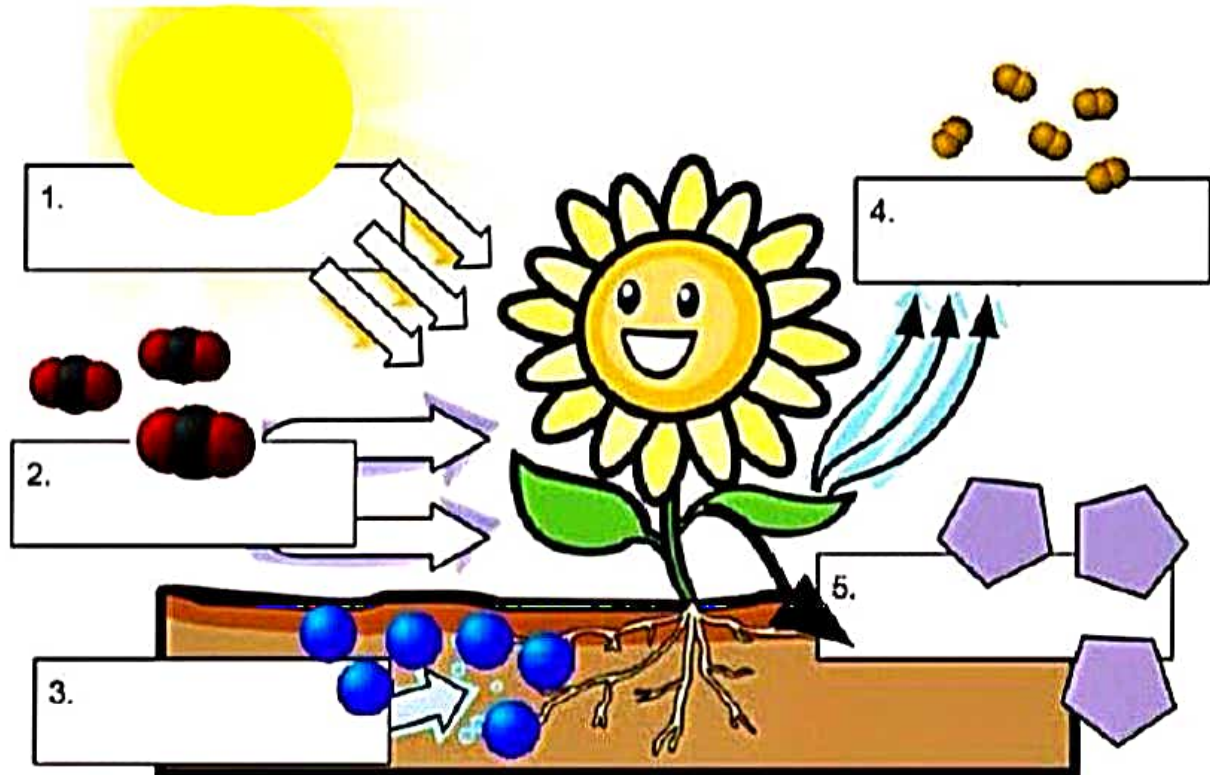
Class: _____

Sec: _____

Roll No. _____

PHOTOSYNTHESIS

- Choose and write the word to the corresponded place to indicate the photosynthesis process.



Oxygen

Sunlight

Carbon dioxide

Water

Glucose

- Complete the paragraph using the words from the word box.

_____ is the process by which plants produce their own food in the presence of _____, _____ and _____.

Plants contain a green pigment called _____ that absorb sunlight. Energy from the sun, carbon dioxide from the atmosphere and water absorbed by the roots react to produce _____ that plant need to survive.

_____ is a gas that is released into the environment for animals and humans to breathe.

Glucose
Sunlight
Oxygen
Photosynthesis
Chlorophyll
Water
Carbon dioxide

- Write suitable adjectives for the following nouns:

1. Sun _____

2. flower _____

3. soil _____

4. wind _____

5. water _____

- Write a short note on 'Photosynthesis'.


- Identify and write names of the shapes given in the picture.

1. _____ 2. _____ 3. _____

4. _____ 5. _____ 6. _____

- Write keywords of following:





Addition	Subtraction	Multiplication	Division
1.	1.	1.	1.
2.	2.	2.	2.
3.	3.	3.	3.
4.	4.	4.	4.



भारत के राज्य , राजधानी और भाषाएँ

क्रम संख्या	राज्य	राजधानी	भाषा
1	आंध्रप्रदेश	अमरावती	-----
2	अरुणाचल प्रदेश	-----	-----
3	असम	-----	-----
4	बिहार	पटना	-----
5	छत्तीसगढ़	-----	-----
6	गोवा	-----	कोंकणी
7	गुजरात	-----	-----
8	हरियाणा	चंडीगढ़	-----
9	हिमाचल प्रदेश	-----	-----
10	झारखंडम	-----	-----
11	कर्नाटक	-----	-----
12	केरल	-----	मलयालम
13	मध्यप्रदेश	-----	-----
14	महाराष्ट्र	-----	-----
15	मणिपुर	-----	-----
16	मिजोरम	-----	-----
17	नागालैंड	कोहिमा	-----
18	उड़ीसा	-----	उड़िया-
19	पंजाब	-----	-----
20	राजस्थान	-----	-----
21	सिक्किम	-----	-----
22	तमिलनाडु	-----	तमिल
23	तेलंगाना	-----	-----
24	त्रिपुरा	-----	-----
25	उत्तर प्रदेश	-----	-----
26	उत्तराखंड	-----	-----
27	पश्चि मबंगाल	कोलकाता	-----
28	मेघालय	-----	-----

1. Write down the uses of the following blocks:-

S.No.	Blocks	Uses
1.		
2.		
3.		
4.		

2. Name any five main components of Scratch.

- a) _____
- b) _____
- c) _____
- d) _____
- e) _____

3. Write the steps to open a saved project in Scratch.

- Ans. _____
- Step1: _____
- Step2: _____
- Step3: _____
- Step4: _____
- Step5: _____